

Ime i Prezime : _____

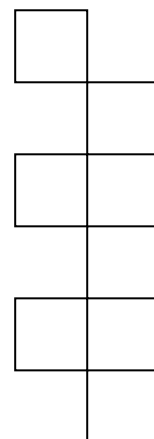
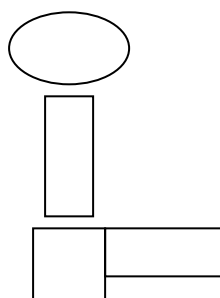
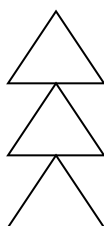

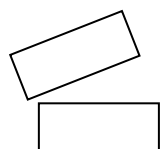

Datum : _____

matematika.

otroci.org

GEOMETRIJA

1. OBOJI:



2. BROJ LIKOVA IZ PRETHODNOG ZADATKA PRIKAŽI U TABELI.

3. NACRTAJ 4 RAVNE, 5 KRIVUDAVE I 6 ZATVORENE LINIJE.