

Ime i Prezime : \_\_\_\_\_


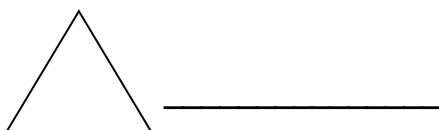


Datum : \_\_\_\_\_

matematika.

otroci.org

## GEOMETRIJA

### 1. NACRTAJ LINIJU I NAPIŠI IME OBLIKA.



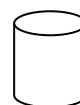
### 2. POMOĆU SLIKE ODGOVORI NA PITANJA.

KOJIH OBLIKA IMA NAJVIŠE? \_\_\_\_\_




- 8

KOJIH OBLIKA IMA NAJMANJE? \_\_\_\_\_



- 7

KOLIKO JE UKUPNO KOCKI I KVADRATA? \_\_\_\_\_



- 10

KOLIKO JE UKUPNO VALJAKA I KUGLI? \_\_\_\_\_



- 3

### 3. ZATVORI NERAVNATE LINIJE!

