

Ime i Prezime : _____




























Datum : _____

matematika.

otroci.org

GEOMETRIJA

1. SA ŠABLONOM NACRTAJ TOLIKO OBLIKA KOLIKO JE PRIKAZANO U TABLICI.

2. NACRTAJ 5 ZATVORENIH I 4 OTVORENE CRTICE.

3. OBOJI ZATVORENE CRTICE CRVENOM BOJOM, A OTVORENE CRTICE PLAVOM BOJOM.

