
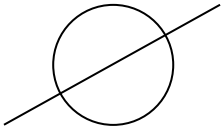


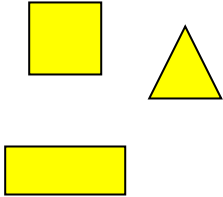


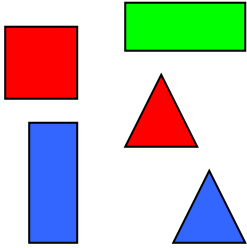


RJEŠENJA

matematika.

otroci.org

1. RAZVRSTAJ LIKE PREMA DANIM KARAKTERISTIKAMA NA DIJAGRAMU.

| | | |
|---|---|---|
| |  |  |
|  |  |  |
|  |  |  |

2. NACRTAJ DRUGI DIO.

