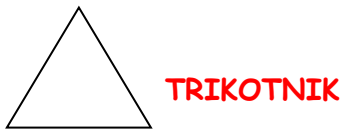
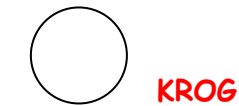


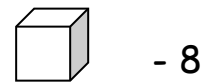
RJEŠENJA

1. NACRTAJ LINIJU I NAPIŠI IME OBLIKA.

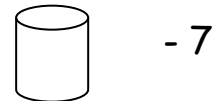


2. POMOĆU SLIKE ODGOVORI NA PITANJA.

KOJIH OBLIKA IMA NAJVIŠE? **KVADROV**



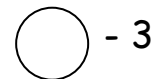
KOJIH OBLIKA IMA NAJMANJE? **KROGEL**



KOLIKO JE UKUPNO KOCKI I KVADRATA? **18**



KOLIKO JE UKUPNO VALJAKA I KUGLI? **10**



3. ZATVORI NERAVNATE LINIJE!

