

Ime i Prezime : \_\_\_\_\_


Datum : \_\_\_\_\_

matematika.


otroci.org

## GEOMETRIJA

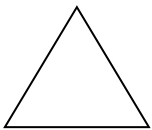
1. Na crtu napiši ime lika.



\_\_\_\_\_



\_\_\_\_\_



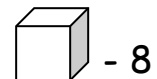
\_\_\_\_\_



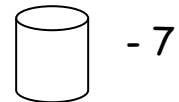
\_\_\_\_\_

2. Odgovori na pitanja pomoću slike.

Koja tijela ima najviše? \_\_\_\_\_



Koja tijela ima najmanje? \_\_\_\_\_




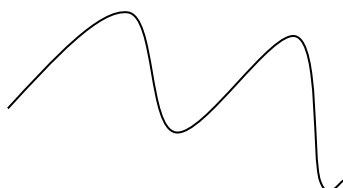
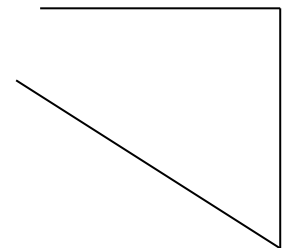

Koliko ima kocki i kvadera zajedno? \_\_\_\_\_



Koliko ima cilindara i kuglica zajedno? \_\_\_\_\_



3. Spoji prekinute crte!



Svih 230 radnih listova iz predmeta matematika za 3. razred, zajedno s rješenjima, dostupno vam je u našoj trgovini.

Za narudžbu posjetite <https://trgovina-matematika.otroci.org/>.

© matematika.otroci.org – Sva prava pridržana. Proizvod je autorsko djelo i zaštićen je zakonom o autorskim pravima.

Autor Nataša Anderlić. Upotreba na vlastitu odgovornost.