

Ime i Prezime : _____

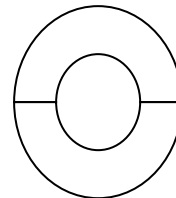
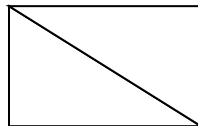
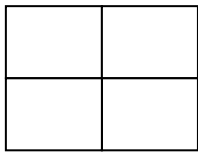
Datum : _____

matematika.

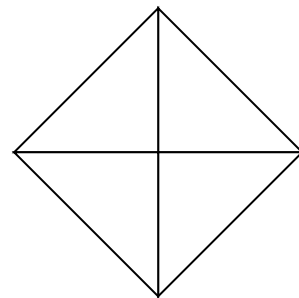
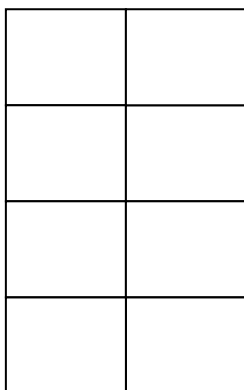
otroci.org

DJELOVI CJELINE

1. Oboji polovicu lika.



2. Oboji četvrtinu lika.



3. Dopuni:

Lik je podijeljen na _____ jednake dijelove. Obojana je _____ lika.

