

Ime i Prezime : _____

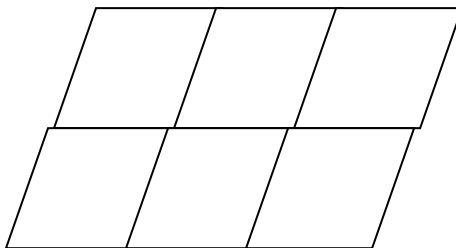
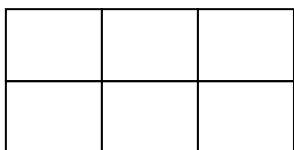
Datum : _____

matematika.

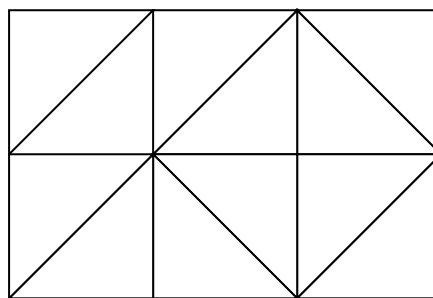

otroci.org

DJELOVI CJELINE

1. Oboji trećinu lika.



2. Oboji šestinu lika.



3. Dopuni:

Lik je podijeljen na _____ jednakih dijelova.

Obojana je _____ lika.

