

Ime i Prezime : _____

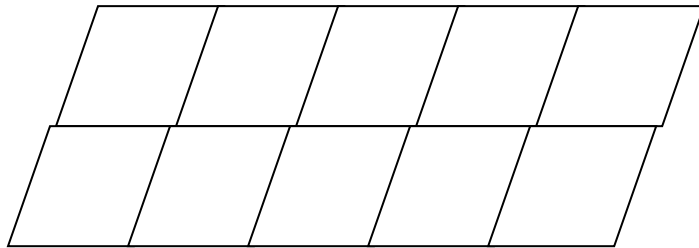
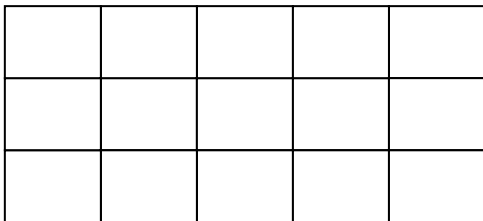
Datum : _____

matematika.

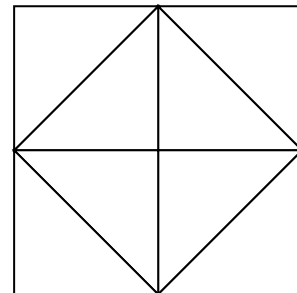
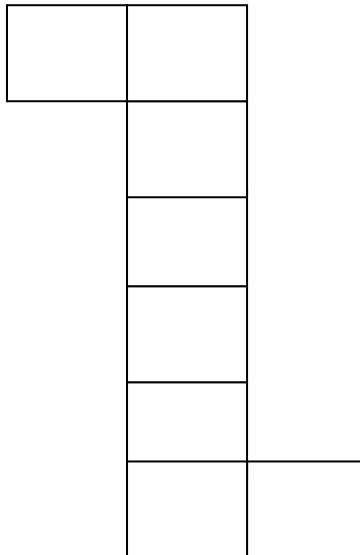
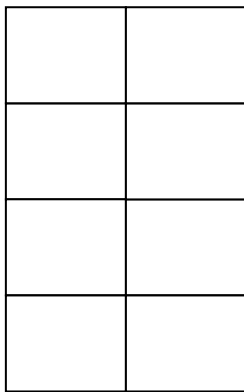
otroci.org

DJELOVI CJELINE

1. Oboji petinu lika.



2. Oboji četvrtinu lika.



3. Dopuni:

Lik je podijeljen na _____ jednakih dijelova.

Obojana je _____ lika.

