

Ime i Prezime : _____

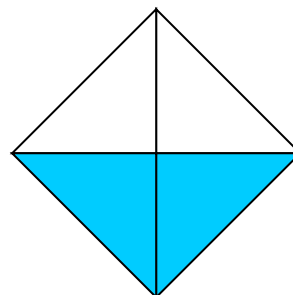

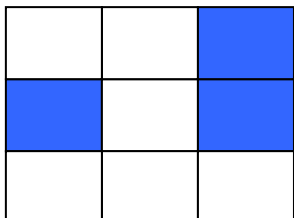
Datum : _____

matematika.

otroci.org

DJELOVI CJELINE

1. Koliki dio lika je obojen?



2. Napiši ime lika, broj stranica i vrhova.

	ime lika	število stranic	število oglišč
