

Ime i Prezime : _____

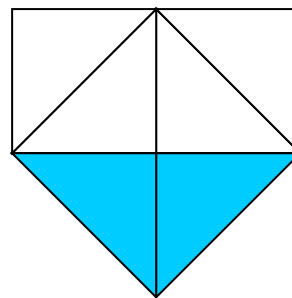
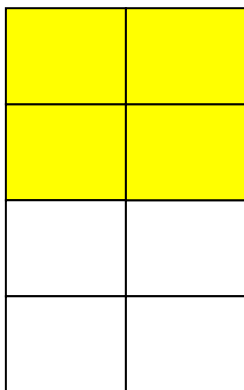


Datum : _____

matematika.

otroci.org

DJELOVI CJELINE

1. Koliki dio lika je obojen?



2. Napiši ime lika, broj stranica i vrhova.

	ime lika	broj stranica	broj vrhova
			
			
			
			