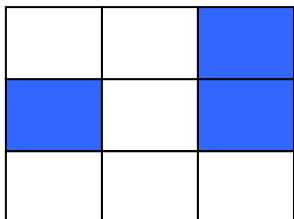


# RJEŠENJA

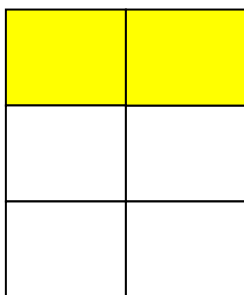
1. Koliki dio lika je obojen?




Trećina



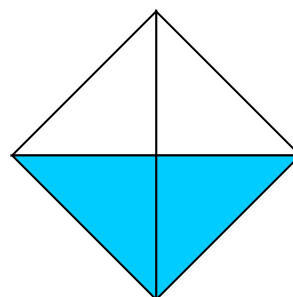
Četvrtina



Trećina



Trećina



Polovica

2. Zapiši ime lika, število stranic in oglišč.

	ime lika	broj stranic	broj vrhova
	Pravokutnik	4	4
	Šesterokut	6	6
	Trokut	3	3
	Petokut	5	5