



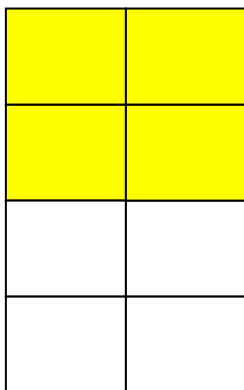
1. Koliki dio lika je obojen?



Devetina



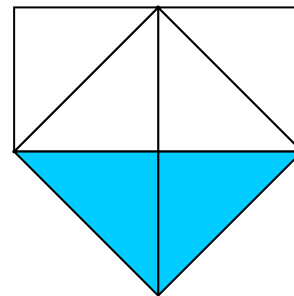
Trećina



Polovica



Četvrtina



Trećina

2. Napiši ime lika, broj stranica i vrhova.

	ime lika	število stranic	število oglišč
	Kvadrat	4	4
	Osmokutnik	8	8
	Krug	1	0
	Trokut	3	3